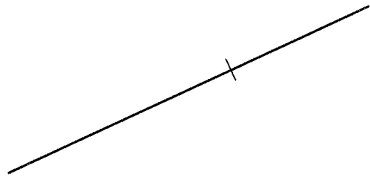
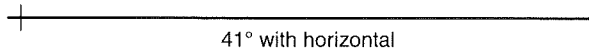


Using a triangle and T-square or two triangles, draw lines parallel to each given line.



Using triangles, draw a line perpendicular to each given line.



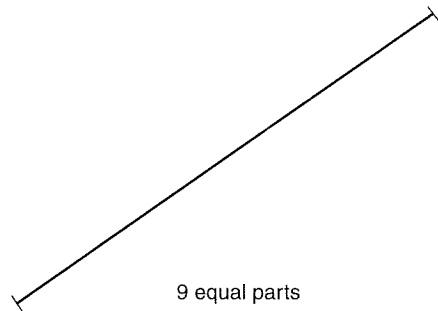
41° with horizontal

87°30' with vertical

Using a protractor, lay off the lines indicated.



7 equal parts



9 equal parts

Using dividers, divide the lines into equal parts as indicated.

NAME

INSTRUMENT DRAFTING

DATE

PROBLEM

2-6