

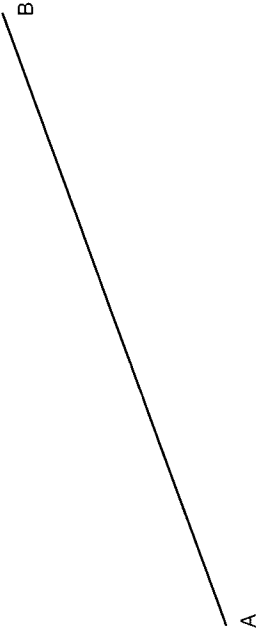



<p>A Bisect the line using a triangle and T-square. Darken required lines and leave all construction lines as drawn.</p> 	<p>B Bisect the line using a compass and straightedge. Darken required lines and leave all construction lines as drawn.</p> 		
<p>C Construct a line 1" from and parallel to Line AB using a triangle and straightedge. Darken required lines and leave all construction lines as drawn.</p> 	<p>D Construct a perpendicular to the line from a point off the line using a triangle and straightedge. Darken required lines and leave all construction lines as drawn.</p> 		
<p>NAME</p>	<p>GEOMETRIC CONSTRUCTIONS</p>	<p>DATE</p>	<p>PROBLEM 6-1</p>