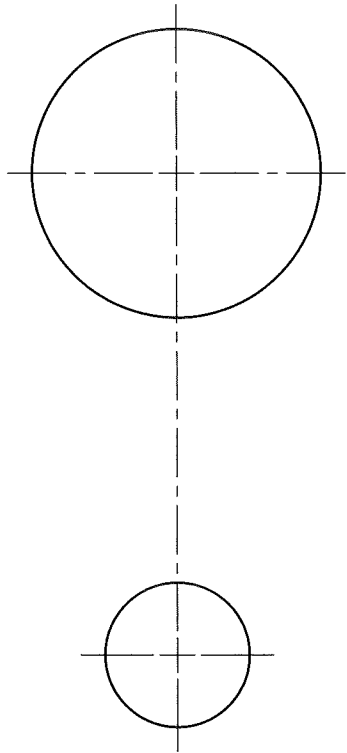
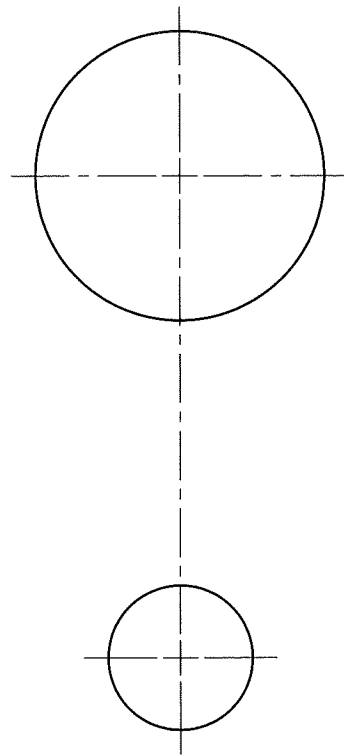


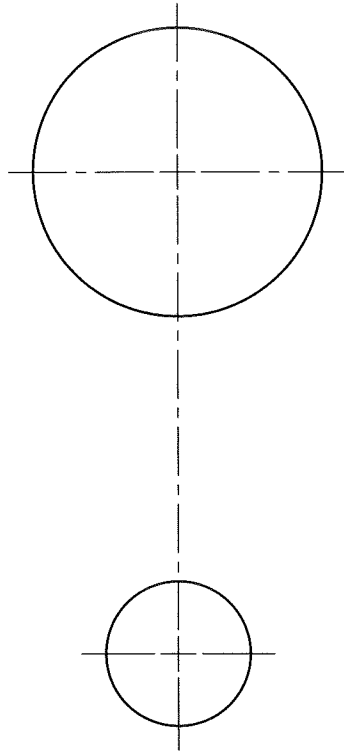
A DRAW LINES TANGENT TO THE TWO CIRCLES. INDICATE TANGENT POINTS.



B DRAW CROSSING LINES TANGENT TO THE CIRCLES. SHOW TANGENT POINTS.



C DRAW ARCS TANGENT TO THE CIRCLES USING A $1\frac{1}{4}$ " RADIUS.



D DRAW $2\frac{1}{2}$ " RADIUS ARCS TANGENT TO THE CIRCLES ENCLOSING BOTH.

NAME

GEOMETRIC CONSTRUCTIONS

DATE

PROBLEM

6-7